

Name: _____

Bar Graph of Ticket Sales

Esther's school sold raffle tickets last week.
The table below shows the number of tickets sold each day.
Use the information in the table to complete the graph.



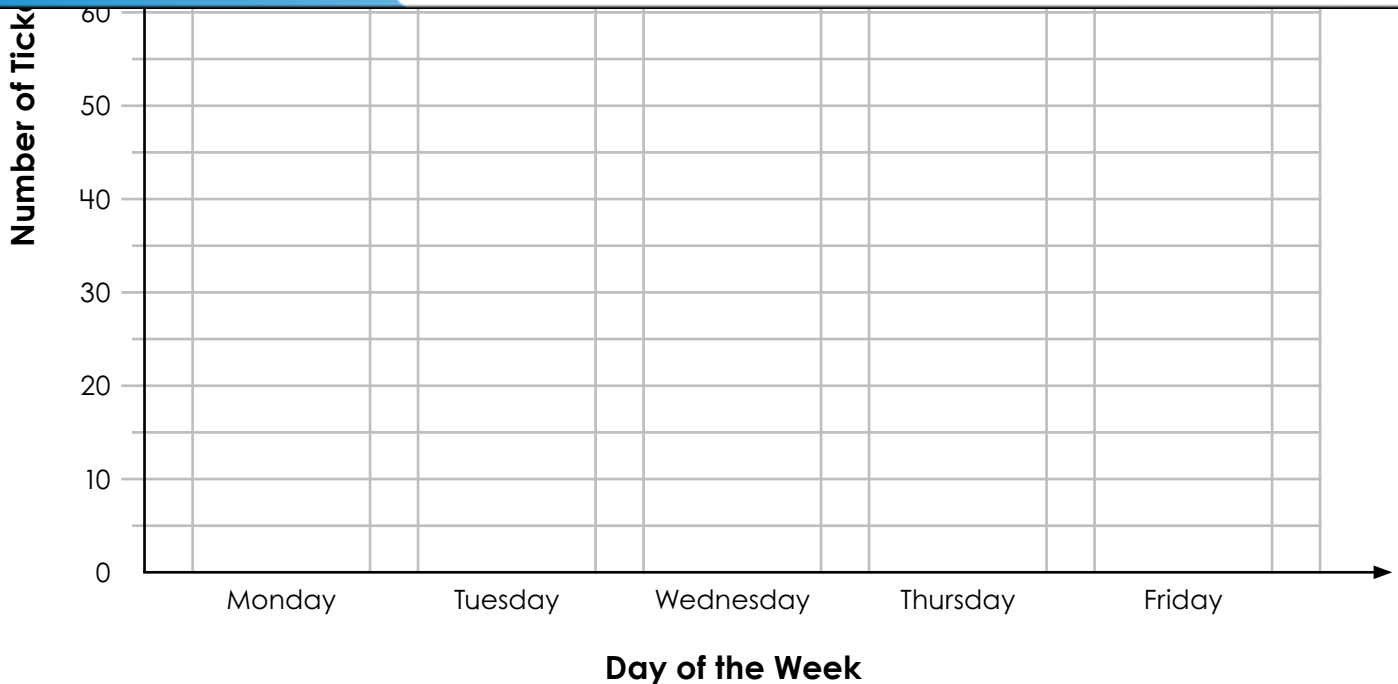
Monday	Tuesday	Wednesday	Thursday	Friday
55	40	25	35	80

Esther's Daily Raffle Ticket Sales



Preview

Please log in to download
the printable version of this worksheet.



Name: _____

Bar Graph of Ticket Sales

Use the bar graph you made to answer the questions.



1. How many tickets were sold on Monday? _____
2. How many tickets were sold on Thursday? _____
3. On which day were the most tickets sold? _____



Preview

Please log in to download
the printable version of this worksheet.

7. How many tickets were sold after Tuesday? _____
8. How many tickets were sold before Thursday? _____
9. During which two day period were 115 tickets sold? _____
10. How many fewer tickets were sold on Wednesday than Thursday? _____

ANSWER KEY

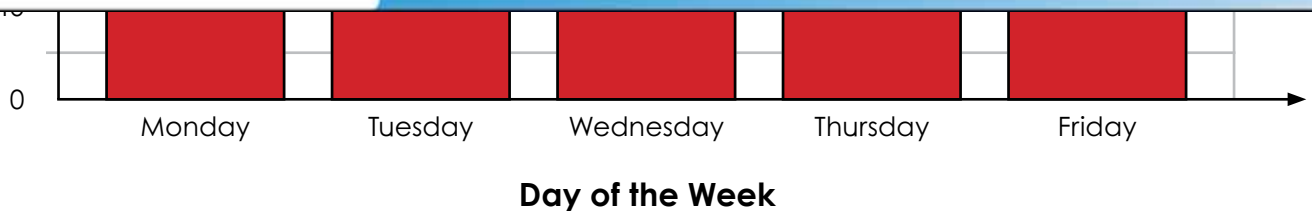
Bar Graph of Ticket Sales

Esther's school sold raffle tickets last week.
The table below shows the number of tickets sold each day.
Use the information in the table to complete the graph.



Preview


Please log in to download
the printable version of this worksheet.



ANSWER KEY

Bar Graph of Ticket Sales

Use the bar graph you made to answer the questions.



1. How many tickets were sold on Monday? 55

Preview

Please log in to download
the printable version of this worksheet.



10. How many fewer tickets were sold on Wednesday than Thursday? 10